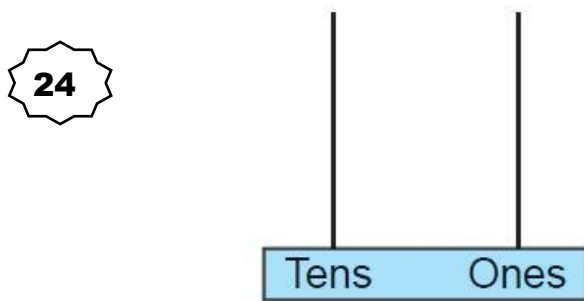


Asha Students Achievement Test (2018 – 19) -- Maths

Student Name		Class	2		
School Name		Date			


1. Read the number and draw beads in the Abacus:



2. Write in expanded form:

26 = _____ tens and _____ ones

3. Count the beads and write the numeral:



Numeral _____

4. Match the following:

Numerals

37

64

50

Number names

Fifty

Thirty-seven

Sixty-four

5. Compare the numbers and write < or > in the box:

i) 13 7

ii) 2 9

6. Look the picture and fill in the box:



+ =



- =

iii) $7 + 5 =$

7. Add:

i)

	T	O
	1	2
+	2	3

ii)

	T	O
	3	4
+	2	8

8. Subtract:

i)

	T	O
	7	6
—	3	2

ii)

	T	O
	6	4
—	2	7

9. Fill in the box:

i. $0 + 3 = \underline{\quad}$

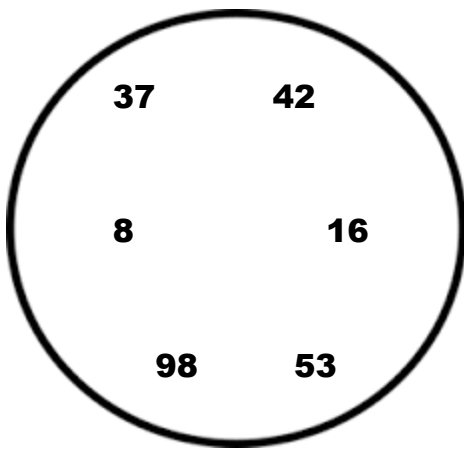
ii. $5 - 5 = \underline{\quad}$

iii. $7 - 0 = \underline{\quad}$

10. Write the missing numbers:



11. Write the greatest and smallest numbers in the following:



Greatest number: _____

Smallest number: _____

12. From the following tick (✓) the Triangles:

